



Name: \_\_\_\_\_ Year: \_\_\_\_\_ Date: \_\_\_\_\_

**Starter:** Work out the sums below.


a)  $\frac{1}{8} + \frac{5}{8}$



b)  $\frac{1}{2} + \frac{1}{4}$



c)  $\frac{2}{5} - \frac{1}{10}$



d)  $\frac{1}{3} + \frac{4}{9}$

